



ADMISSION TEST PAPER 2025-26
SUBJECT: MATHEMATICS
CLASS: PREP 2

Name: _____

Duration: 30 min

Date: _____

Marks Obtained: /20

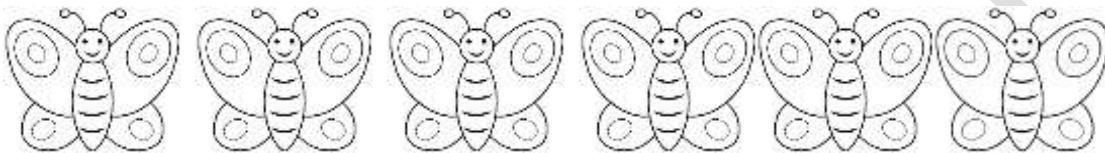
Q1. Fill in the missing numbers.

/3

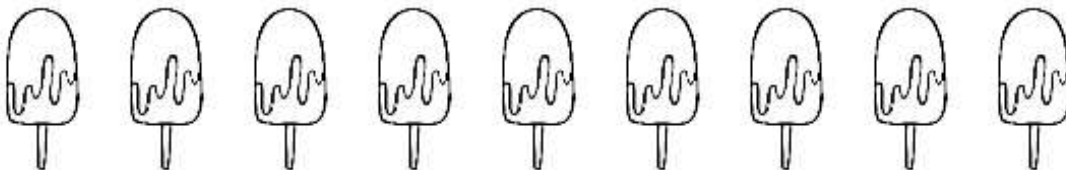
12 _____ 14 _____ 16 _____

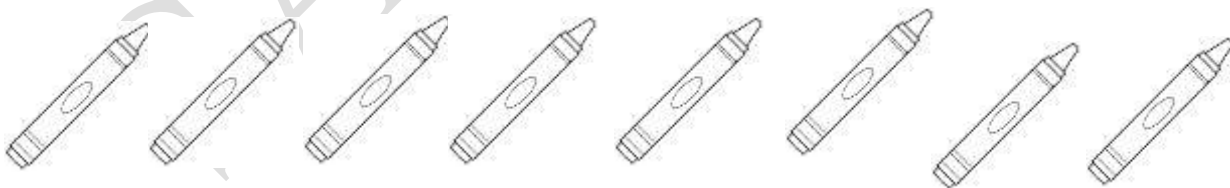
Q2. Count and write the correct number.

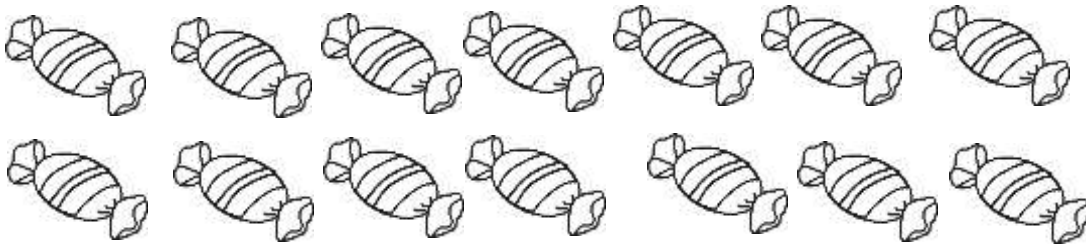
/5











Q3. Read the number names and write the correct number.

/2

zero _____

twenty _____

eighteen _____

fifteen _____

Q4. What come before.

/4

_____ 3

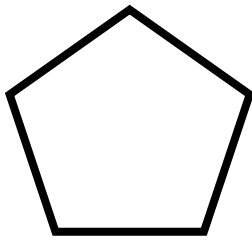
_____ 6

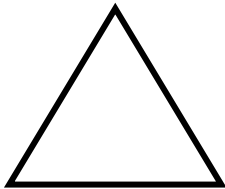
_____ 1

_____ 9

Q5. How many sides does each shape have? Count and write.

/3







Q6. Colour the following shapes.

/3

(Square - yellow, oval - orange, star - purple)

