



ADMISSION TEST PAPER 2024-25  
SUBJECT: MATHEMATICS  
CLASS: 2

Name: \_\_\_\_\_

Duration: 30 min

Date: \_\_\_\_\_

Marks Obtained: /20

Q1. Write in numerals or words. ( /4)

Words	Numerals
thirty-eight	
fifty	
	91
	23

Q2a. Write the numbers in order, starting with the greatest. ( /1.5)

47 , 65 , 56

\_\_\_\_\_ / \_\_\_\_\_ / \_\_\_\_\_

b. Write the numbers in order, starting with the smallest.

97 , 79 , 87

\_\_\_\_\_ / \_\_\_\_\_ / \_\_\_\_\_

Q3. Solve the following. ( /3)

a.  $9 + 9 =$  \_\_\_\_\_

b.  $17 - 8 =$  \_\_\_\_\_


c.  $20 + 20 =$  \_\_\_\_\_

Q4. Complete the number patterns. ( /3)

a. 61, \_\_\_\_\_, \_\_\_\_\_, 58, 57, \_\_\_\_\_, 55

b. 24, 26, \_\_\_\_\_, 30, \_\_\_\_\_, 34, \_\_\_\_\_

Q5. Fill in the blanks with **more** or **fewer**. ( /2)



a. There are 3 \_\_\_\_\_ caterpillars than butterflies.

b. There are 3 \_\_\_\_\_ butterflies than caterpillars.

Q6. Fill in the missing numbers.


( /2)

- a. \_\_\_\_\_ is 2 more than 32.
- b. \_\_\_\_\_ is 1 less than 70.
- c.  $6 \times 3 =$  \_\_\_\_\_
- d.  $5 \times 2 =$  \_\_\_\_\_

Q7a. Ben has 15 balloons. Mina has 6 balloons.

( /1)


How many balloons do they have altogether?



b. There are 25 eggs. 7 eggs hatch into tadpoles.

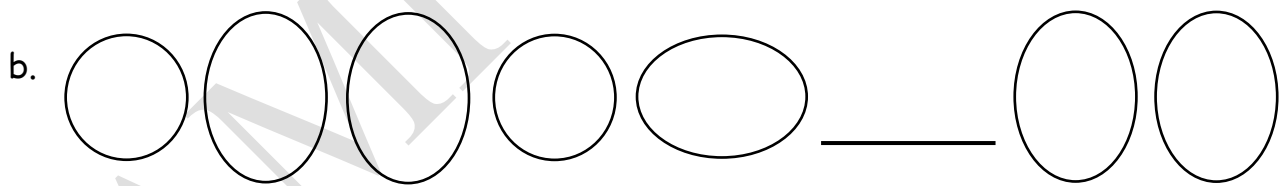
( /1)

How many eggs are left?



Q8. Draw the shapes to complete each pattern.

( /1.5)



Q9. How many shapes can you see in the picture?

( /1)

Label the picture with the names of shapes.

triangle - rectangle - square

I can see \_\_\_\_\_ (2/3) shapes in the picture.

