

Name: _____

Duration: 30 min

Date: _____


Marks Obtained: _____ /20

Q1. Add.

(_____ /4)



a) 2 and 7 make _____ .



b) 5 and 3 make _____ .

Q2. Fill in the blanks.

(_____ /6)



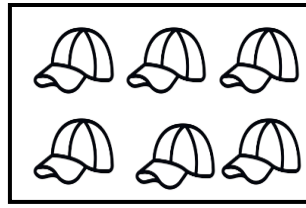

There are _____ cupcakes.

_____ cupcakes have candles on them.

_____ cupcakes do not have candles on them.



Q3. Circle the group with more caps.

(/1)



Q4. Circle the group with fewer stars.

(/1)



Q5. Arrange the numbers in order.

(/2)

a) Start with the greatest.

9 1 6

_____ , _____ , _____


b) Start with the smallest.

6 2 8

_____ , _____ , _____

Q6. Count and write in numbers and in words.

(/6)



_____ = _____



_____ = _____



_____ = _____



_____ = _____