



ADMISSION TEST PAPER 2024-25
SUBJECT: MATHEMATICS
CLASS: PREP 2

Name: _____

Duration: 30 min

Date: _____

Marks Obtained: _____ /25


Q1. Fill in the missing numbers.


/5

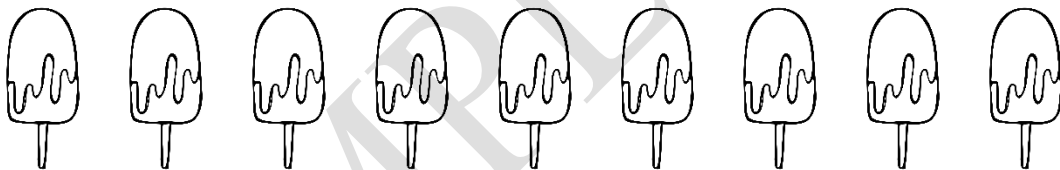
12 _____ 14 _____ 16 _____ .

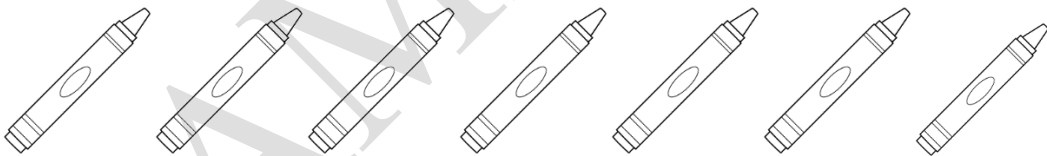
Q2. Count and write the correct number.


/5











Q3. Read the number names and write the correct number.

/4

zero

twenty

eighteen

fifteen

Q4. What come before.

/4

_____ 3

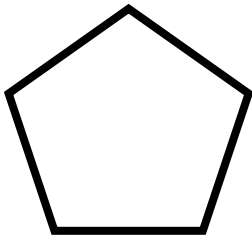
_____ 6

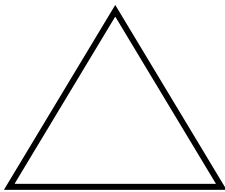
_____ 1

_____ 9

Q5. How many sides does each shape have? Count and write.

/3







Q6. Colour the following shapes.

/4

(Square - yellow, oval - orange, star - purple, rhombus - blue)

