



Name: _____

Duration: 30 min

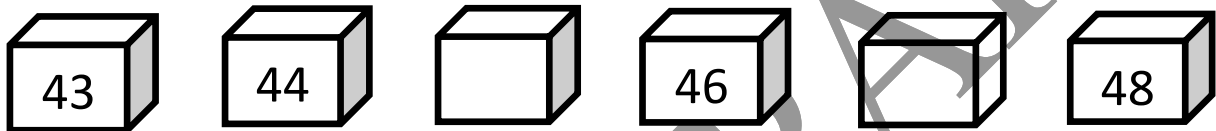
Date: _____

Marks Obtained: /25

Q1. Circle the correct number given in words. (/2)

- | | | | |
|------|------------|---------|-------------|
| 50 → | fifty, | five, | fifteen |
| 17 → | seventeen, | seven, | seventy one |
| 8 → | eighteen, | eight, | eighty |
| 21 → | twenty, | twelve, | twenty one |

Q2. Write the missing numbers. (/2)



Q3. Write the numbers in the stars in order from the greatest number to the smallest number. (/2)



Q4. Fill in the blanks. (/2)

97 = _____ tens _____ ones

3 = _____ tens _____ ones

Q5. Subtract.





(/4)

$$\begin{array}{r} \text{T} \quad \text{O} \\ 8 \quad 8 \\ - 6 \quad 1 \\ \hline \\ \hline \end{array}$$

$$\begin{array}{r} \text{T} \quad \text{O} \\ 5 \quad 9 \\ - 4 \quad 5 \\ \hline \\ \hline \end{array}$$

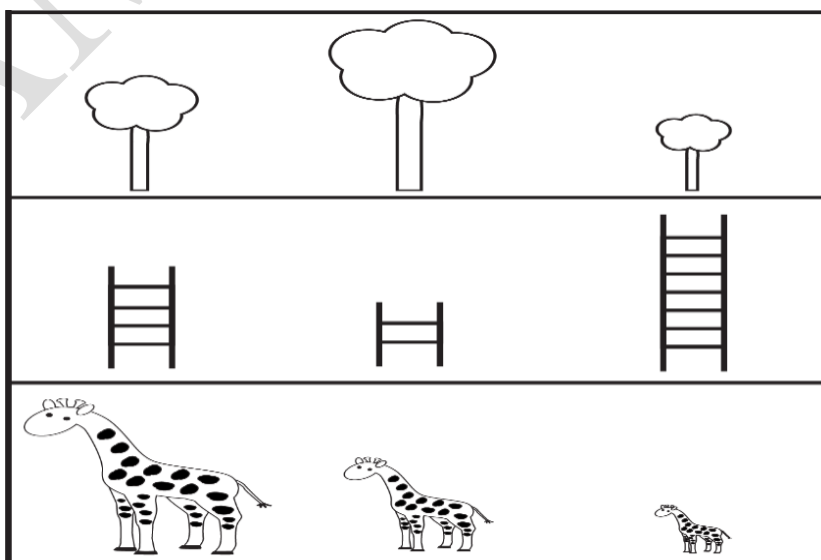
Q6. Write the names of the shapes.

(/4)

Shape	Name
	
	
	
	

Q7. Circle the shortest one.

(/3)



Q8. Sally has 5 flowers.

(/2)

Linda gives her 3 flowers.

How many flowers does Sally have altogether?

$$\begin{array}{r} \square \\ + \square \\ \hline \square \end{array}$$

Sally has flowers altogether.

Q9. Fill in the blanks.

(/2)

a) $2 \times 7 = \underline{\quad}$

b) $5 \times \underline{\quad} = 40$

Q10. Draw the next shape.

(/2)

