



ADMISSION TEST PAPER 2024-25
SUBJECT: MATHEMATICS
CLASS: 1

Name:

Duration: 30 min

Date:

Marks Obtained: /25

Q1) Match the number with its number name

____/5

20

nine

18

fourteen

50

twenty

9

eighteen

14

fifty

Q2) Write the numerals from 19 - 40

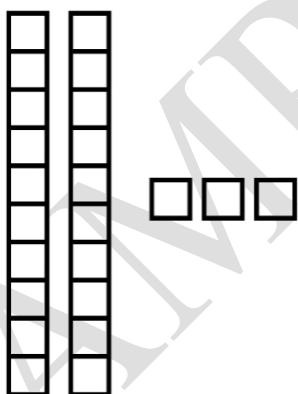
____/4

T	O	T	O

Q3) Count and write the number.

____/4

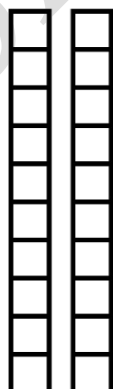
a)



=

Tens	Ones

b)



=

Tens	Ones

Q4) What comes after:

____/2

a) 24 _____

b) 19 _____

c) 58 _____

d) 90 _____

Q5) What comes before:

____/2

a) _____ 27

b) _____ 48

c) _____ 20

d) _____ 31

Q6) Circle the time shown.

____/1



12 o'clock

1 o'clock

Q7) Do as directed.

____/5

a) write in words

13 _____

b) Write in number

5 tens = _____

c) What comes next in the sequence?




d) Circle the bigger number:

36

63

e) Circle the heavier:



Q7) Addition

____/2

a) $5 + 6 =$ _____

b) $9 + 4 =$ _____